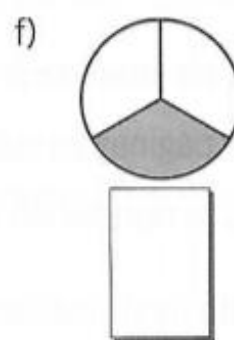
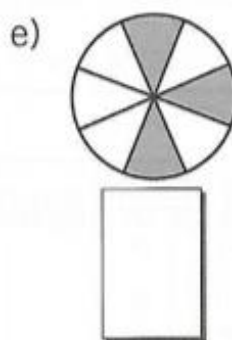
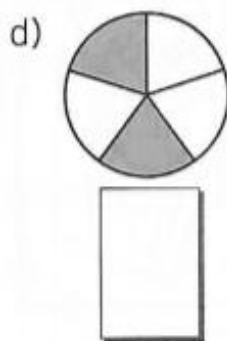
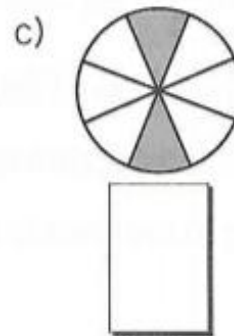
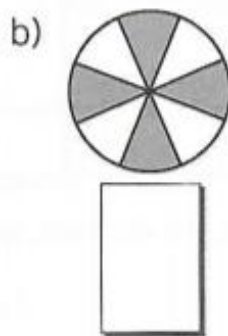
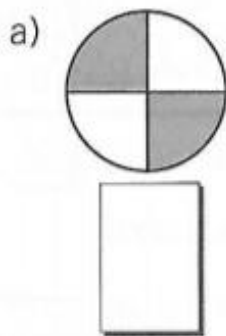


NOME: _____ DATA: ____/____/____

EXPLORANDO AS FRAÇÕES

1. Observe as partes pintadas e anote a fração correspondente.



2. Murilo cortou uma maçã em quatro partes.


a) Que fração representa cada parte da maçã?

b) Que fração representa três partes da maçã?



Silvio Gregório

3. Sandra comprou uma dúzia e meia de laranjas e usou $\frac{1}{3}$ para fazer suco. Quantas laranjas foram usadas no total e quantas ainda restam?



Marcelo Gagliano

