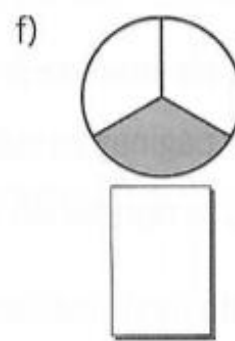
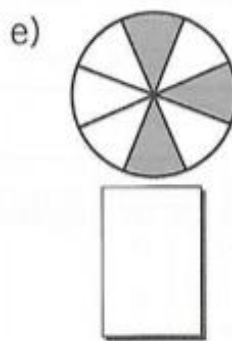
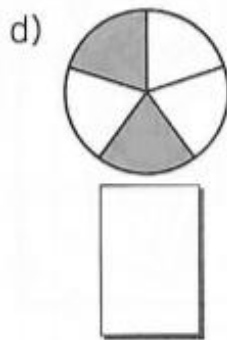
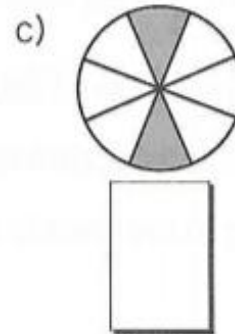
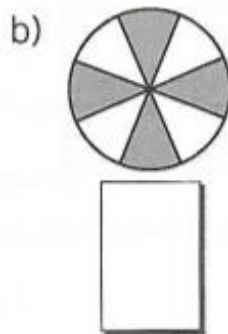
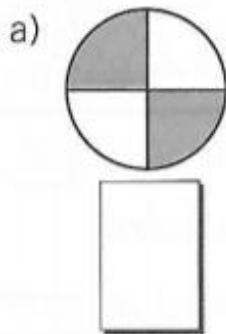


NOME: \_\_\_\_\_ DATA: \_\_\_\_/\_\_\_\_/\_\_\_\_

## EXPLORANDO AS FRAÇÕES

1. Observe as partes pintadas e anote a fração correspondente.



2. Murilo cortou uma maçã em quatro partes.

a) Que fração representa cada parte da maçã?

\_\_\_\_\_


b) Que fração representa três partes da maçã?

\_\_\_\_\_



Silvio Gregório

3. Sandra comprou uma dúzia e meia de laranjas e usou  $\frac{1}{3}$  para fazer suco. Quantas laranjas foram usadas no total e quantas ainda restam?



Marcelo Gagliano

